



أهل القمة

تقدم لكم

نموذج امتحان مستوى

مادة الحاسوب



- 1- one of these is NOT from the computer system components :
a. software b. hardware c. operating system d. none of them
- 2- 1 byte = bits :
a. 8 bits b. 6 bits c. 20 bits d. 16 bits
3. ALU is an abbreviation for :
a. arithmetic and logic unit b. applied logical unit c. Array of logistical unit d. Absolute lower utility
4. in excel the intersection of a column and row is called :
a. range b. block c. selection d. cell
5. how many rows is on excel worksheet :
a. 1024 b. 65536 c. 256 d. 6000
6. a new blank workbook contains how many worksheets :
a. 1 b. 2 c. 3 d. 4
7. a rectangular block of cells is called :
a. data block b. paragraph c. range d. row
8. what are the two types of constants :
a. text and numbers b. label and text c. formula and number d. relative and absolute
9. the way that information are appears in a cell is referred to cells :
a. format b. style c. mode d. attributes
10. CPU is an abbreviation for :
a. central programming unit b. categorized program unit
c. central processing unit d. central program uniform
11. folders are used to :
a. organizes files b. deletes files c. open files d. close files
12. one of these is an input :
a. keyboard b. printer c. speakers d. none of them
13. one of these is an output :

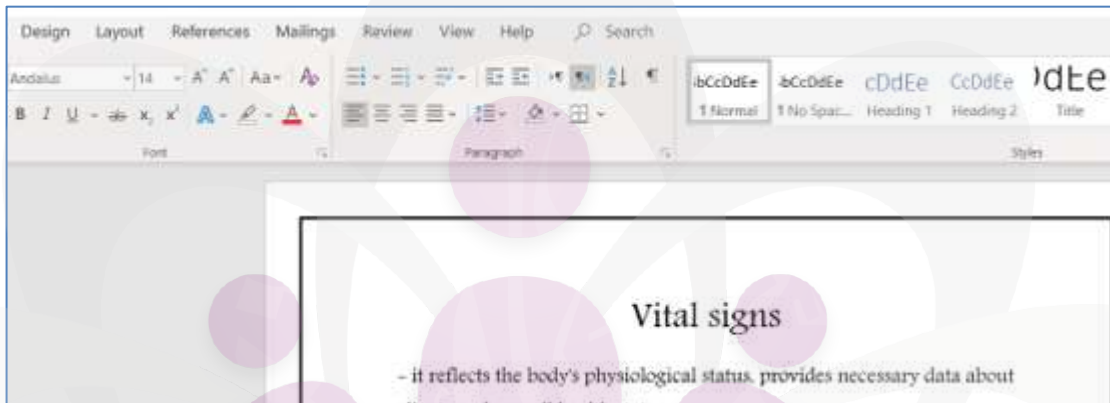
كتلة أهل الهمّة تقدّم لكم أسئلة سنوات حاسوب مستوى

- a. keyboard b. mouse c. scanner d. printer

14. screen is an input unit :

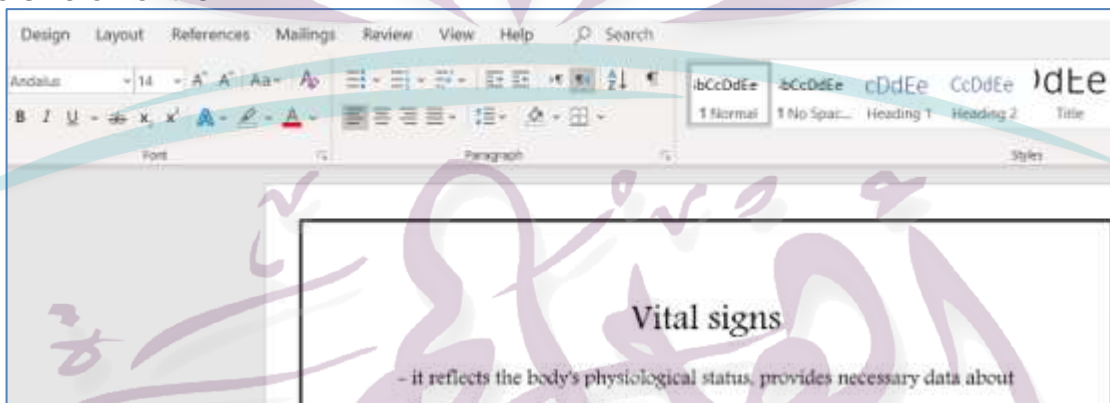
- a. yes b. no

15. what is the font that is use in this doc :



- a. Andalus
b. Calibri
c. Times new roman
4. Arial

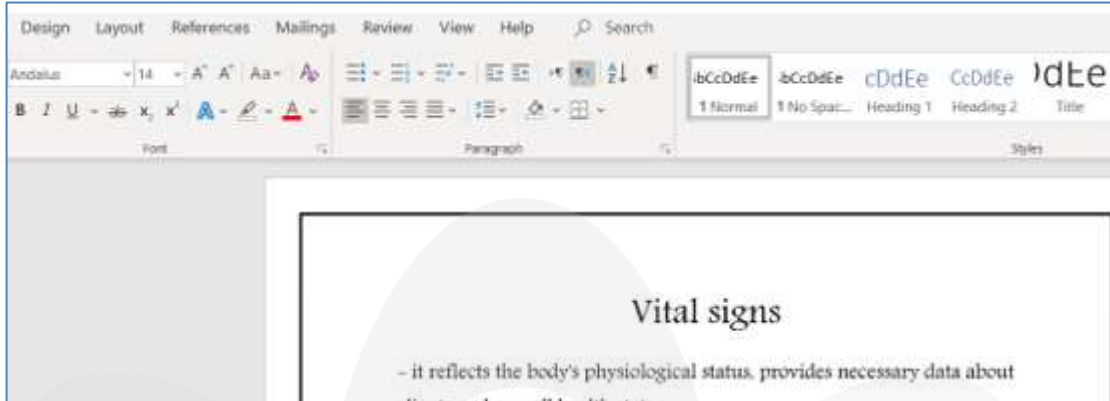
16. the size of font is :



- a. 14
b. 16
c. 20
4. 30

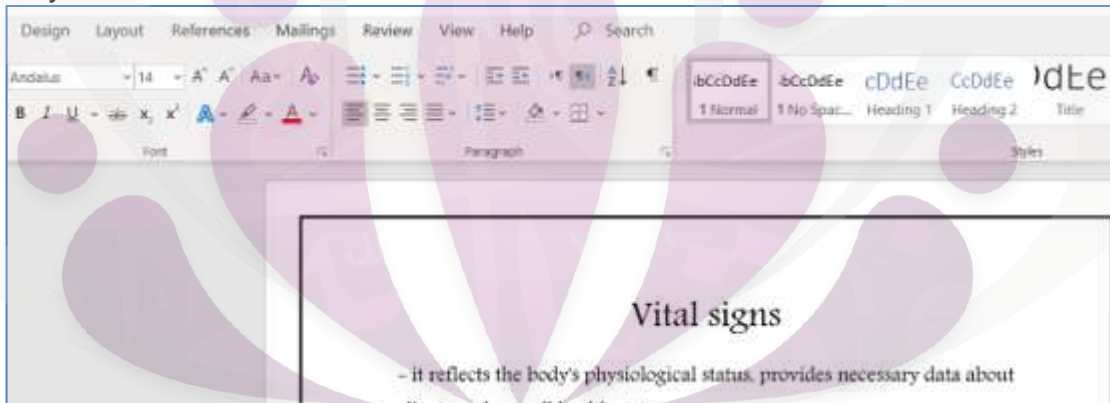
17. the align of the text is to :

كتلة أهل الهمة تقدم لكم أسئلة سنوات حاسوب مستوى



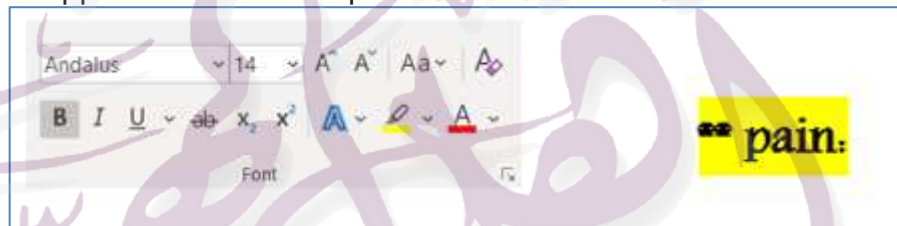
- a. right
- b. center
- c. left
- 4. none of them

18- the style of the text is :



- a. normal
- b. strong
- c. quote
- d. emphasis

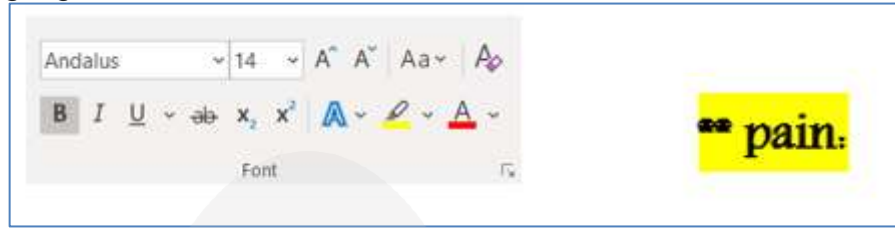
19. the condition that is applied on the word "pain" is :



- a. bold
- b. italic
- c. underline
- 4. none of them

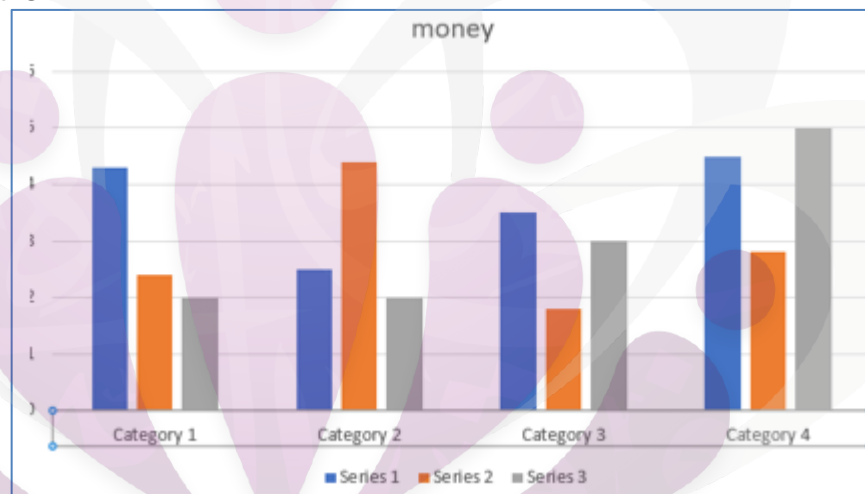
كتلة أهل الهمّة تقدّم لكم أسئلة سنوات حاسوب مستوى

20. the color of the highlighter is :



- a. yellow
- b. red
- c. pink
- d. white

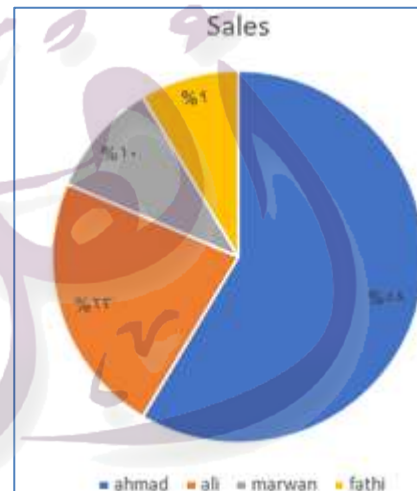
21. the title of this chart is :



- a. bank
- b. money
- c. category
- d. series

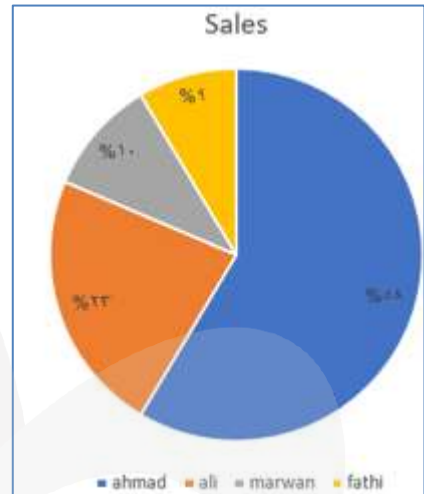
22. Ahmad, Ali and Marwan are an example for :

- a. title
- b. legend
- c. label
- d. none of them



كتلة أهل الهمّة تقدّم لكم أسئلة سنوات حاسوب مستوى

23. 58% is an example for :



- a. title b. Legend c. Label d. none of them

24. number of pages :



- a. 11 pages b. 20 pages c. 7 pages d. 6 pages

25. number of words :



- a. 1176 words b. 7 words c. 11 words d. 76 words

26. what is the name of the active cell :

A screenshot of an Excel spreadsheet showing a grid of data. The active cell is highlighted in yellow and contains the value 183. The grid has columns B, C, and D, and rows 12 through 22. The values in the grid are as follows:

	B	C	D
12	191	185	6
13	193	190	3
14	176	175	1
15	212	210	2
16	177	173	4
17	183	180	3
18	211	204	7
19	198	192	6
20	157	152	5
21	213	209	4
22	161	153	8

- a. c17 b. d22 c. b12 d. c15

27. what is the name of the yellow cell :

كتلة أهل الهممة تقدم لكم أسئلة سنوات حاسوب مستوى

	B	C	D
12	191	185	6
13	193	190	3
14	176	175	1
15	212	210	2
16	177	173	4
17	183	180	3
18	211	204	7
19	198	192	6
20	157	152	5
21	213	209	4
22	161	153	8

- a. c17 b. b17 c. d17 d. b20

28. what is the content of cell d20 :

	B	C	D
12	191	185	6
13	193	190	3
14	176	175	1
15	212	210	2
16	177	173	4
17	183	180	3
18	211	204	7
19	198	192	6
20	157	152	5
21	213	209	4
22	161	153	8

- a. 5 b. 161 c. 157 d. 152

29. the function that is applied on the cell is :

fx	=SUM(C12:C26)
----	---------------

- a. count b. max c. min d. sum

30. the range of cells :

fx	=SUM(C12:C26)
----	---------------

- a. c12:c26 b. b27:c27 c. c12: c27 d. none of them

31. detect the active sheet :

كتلة أهل الهمّة تقدّم لكم أسئلة سنوات حاسوب مستوى

General

Sorting ,Subtotal

Chart

Pie Chart

Filtering

Scenario

a. general

b. chart

c. scenario

d. sorting, subtotal

32. GB equals: :

a. 0 or 1

b. 1024 : 1024 KB

c. 8 bits

d. 2¹⁰ KB

33. Gigabyte is :

a. 8 bits

b. 1024 megabyte

c. 1024 byte

d. 1024 kilobyte

34. which one of these devices can accept both input and output data :

a. light pen

b. speaker

c. touch screen

d. printer

35. temporary memory is called :

a. DOS

b. COD

c. ROM

d. RAM

36. **TOUCH SCREEN** IS Considered as input and output device :

a. true

b. false

37. the extension for "Microsoft power point" is ppt :

a. true

b. false

38. the extension for "Microsoft word " is :

a. ppt

b. doc

c. xlsx

d. pdf

39. DVD is an abbreviation for " display video disk: :

true

false

40. RAM is an abbreviation for "random access memory" :

True

False

41. the speed of a computer CPU can be measured in megahertz :

True

False

42. which one of the following should be used to change your password in your computer :

كتلة أهل الهمة تقدم لكم أسئلة سنوات حاسوب مستوى

- a. internet explorer b. Anti-virus software
c. control panel d. windows firewall

43. which is the smallest unit of computer storage :
a, byte b. bit c. kilo bit d. megabyte

44. what is a URL :
a. an email address
b. the tittle of a web site
c. the address of a page on the World Wide Web
d. a communication method between computers and printers

45. which of the following is a storage device :
a. keyboard b. monitor c. speaker d. disk drive

46. which of these is NOT a storage device :
a. RAM b. USB c. printer d. hard disk



كتلة أهل الهمة تقدم لكم
أسئلة سنوات حاسوب مستوى

الاجابات

<u>1</u>	C	<u>24</u>	A
<u>2</u>	A	<u>25</u>	A
<u>3</u>	A	<u>26</u>	A
<u>4</u>	D	<u>27</u>	B
<u>5</u>	B	<u>28</u>	A
<u>6</u>	C	<u>29</u>	D
<u>7</u>	A	<u>30</u>	A
<u>8</u>	A	<u>31</u>	D
<u>9</u>	A	<u>32</u>	B
<u>10</u>	C	<u>33</u>	B
<u>11</u>	A	<u>34</u>	C
<u>12</u>	A	<u>35</u>	D
<u>13</u>	D	<u>36</u>	A
<u>14</u>	B	<u>37</u>	A
<u>15</u>	A	<u>38</u>	B
<u>16</u>	A	<u>39</u>	FALSE
<u>17</u>	C	<u>40</u>	TRUE
<u>18</u>	A	<u>41</u>	TRUE
<u>19</u>	A	<u>42</u>	C
<u>20</u>	A	<u>43</u>	B
<u>21</u>	B	<u>44</u>	C
<u>22</u>	B	<u>45</u>	D
<u>23</u>	C	<u>46</u>	C